

Luna Lucy



Author
Lisa Van Der Wielen

Illustrator
Joseph Hopkins

Name: _____

Date: _____

Luna Lucy

I E N U T P E N G R F U H A L F Q
J L G H L O B S O J W U M I Z T U
J S L Z G X M Y U W R P I O I O A
M N U P L U C Y X E A I O O O G R
C Z R X F C S B P H G N P D I N T
T T E A K Z G S X Z K J I B X M E
F W A N U L G N I Y M T B N Y G R
H R P M P Z C T I L T O Q H G S L
C S T A R S P H P X U T V M R S V
R Q I I V C C G V S A E U H B E W
E R M R F V X I F A D W V L F S C
S I T U Y Q T N F F D R N V E A R
C B L G K O P M S M A A A A D H P
E L S A S G J N F G R S R W U P A
N C R M P N U V C U D Q X X M Q C
T K K B C A S S S A V N N E W A I
A E X P L E P V D N S N L Q H H F

draw Dad gibbous waning waxing new
full half quarter crescent stars Sky Night
Neptune phases moon Lucy Luna



Name: _____

Date: _____

Moon Phases

Unjumble the following words:

1. LLFU NMOO _____

2. USN _____

3. REHTA _____

4. LNURA _____

5. XIAGNW ERCTCNSE _____

6. SRTIF ARURQET _____

7. ALTS URTEQRA _____

8. GANXWI SOBIUGB _____

9. NNIGAW SOIGBUB _____

10. GBBOISU _____

11. SHEPA _____

12. NGNAWI CTCRNEES _____

13. OMNO _____

14. IWNGAN _____

15. AINXWG _____


16. STOIBR _____



Name: _____

Date: _____

Moon Phases



Across

1. When half of the moon light is in the left it is a?
3. When there is more light the moon has to be a?
5. What does the moon do to the earth?
8. When the moon is 100% it has to be a?
9. Both the moon and the sun have a _____ effect on the earth.
10. When the moon disappears it has to be a?
11. When the moon looks like a banana it has to be a?

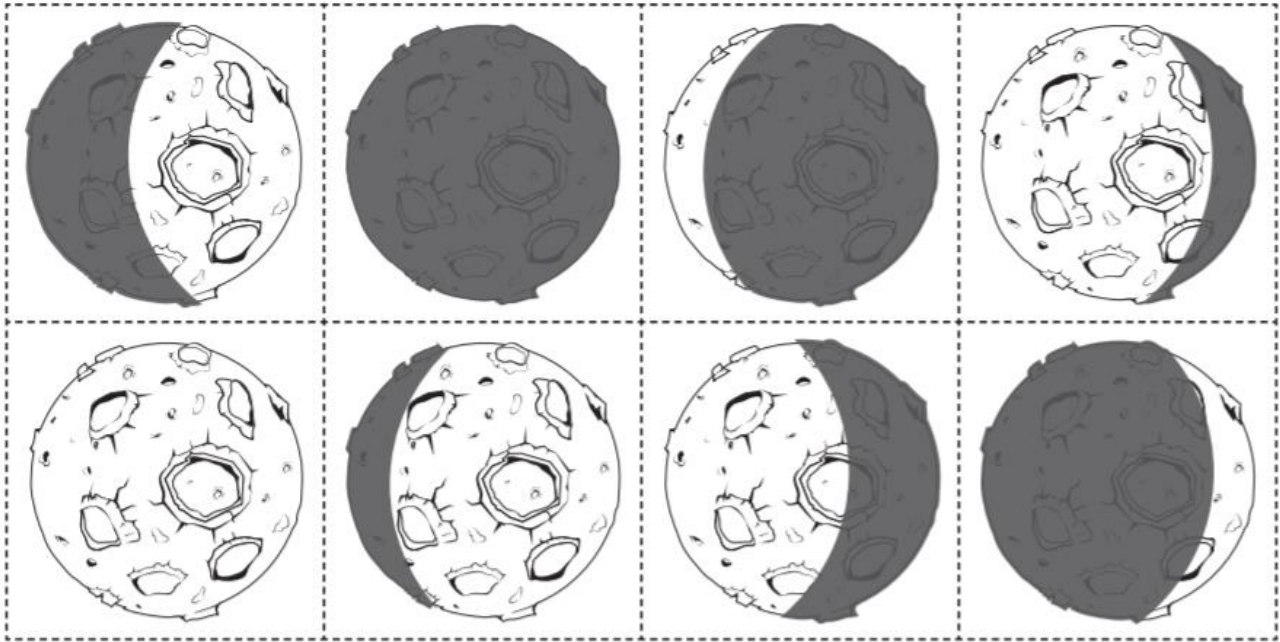
Down

2. When half of the moon light is in the right it is a?
4. The light of the moons _____ can be seen on the surface of the water.
6. When the light is in the right then the moon has to be?
7. When the light is in the left the moon had to be?



Northern Hemisphere Moon Phases

Cut out and match the moon pictures and their labels. Glue each phase in your workbook in the correct order.

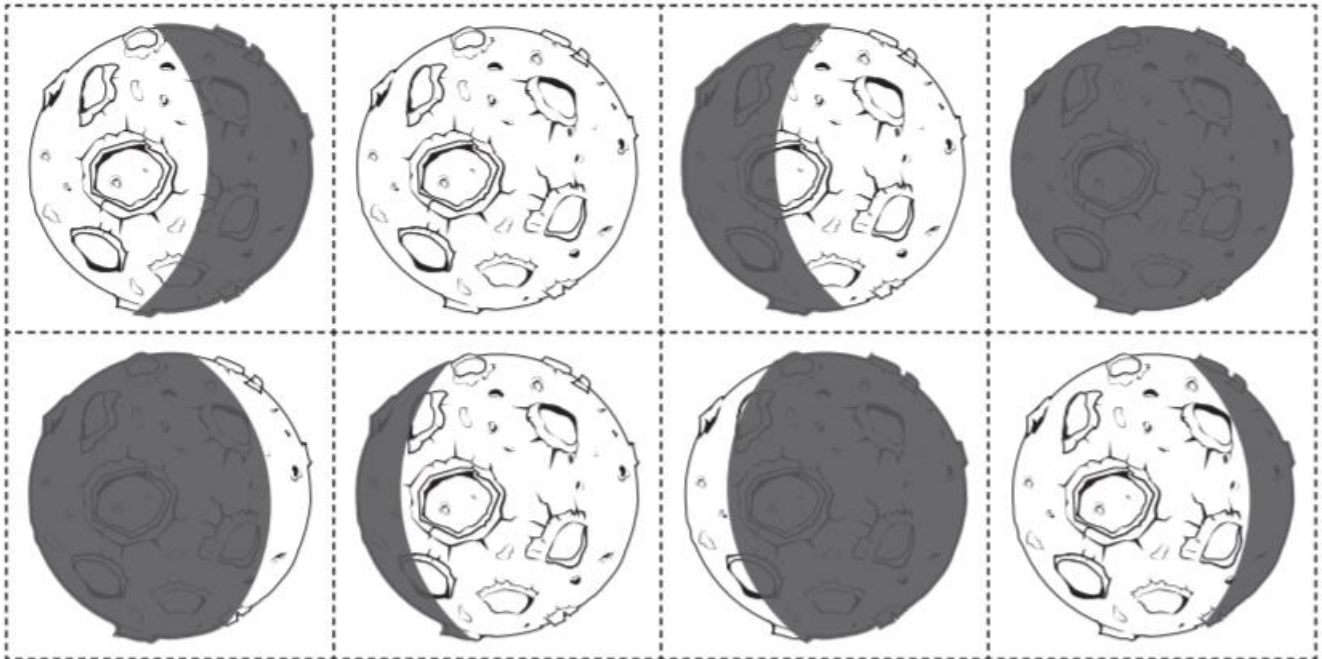


Waxing Crescent	First Quarter	Waning Crescent	New Moon
Full Moon	Last Quarter	Waxing Gibbous	Waning Gibbous



Southern Hemisphere Moon Phases

Cut out and match the moon pictures and their labels. Glue each phase in your workbook in the correct order.



Waxing Crescent	First Quarter	Waning Crescent	New Moon
Full Moon	Last Quarter	Waxing Gibbous	Waning Gibbous

Luna
Lucy



Luna Lucy Moon Maze

